

NAME _____

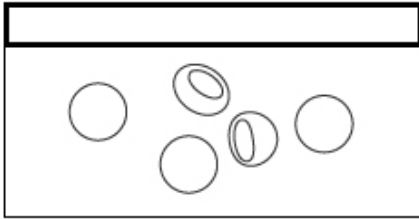
DATE _____



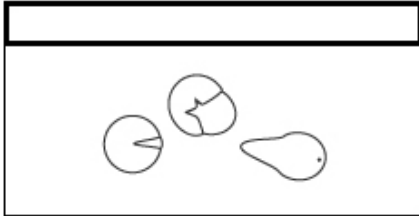
BRINE SHRIMP LIFE CYCLE

BEGIN


Label the brine shrimp life cycle stages below. List three important facts about each.



- 1.
- 2.
- 3.



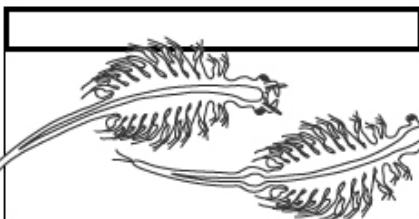
- 1.
- 2.
- 3.



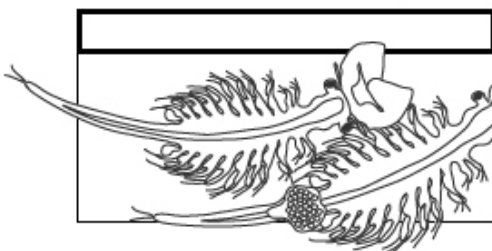
- 1.
- 2.
- 3.



- 1.
- 2.
- 3.



- 1.
- 2.
- 3.



- 1.
- 2.
- 3.